

Name \_\_\_\_\_

..... **Zero in on the Order** .....



**Write the sums.**

1.  $0$   
 $+ 8$

2.  $8$   
 $+ 0$

3.  $4$   
 $+ 6$

4.  $6$   
 $+ 4$

5.  $9$   
 $+ 1$

6.  $1$   
 $+ 9$

7.  $5$   
 $+ 3$

8.  $3$   
 $+ 5$

9.  $7$   
 $+ 3$

10.  $0$   
 $+ 5$

11.  $2$   
 $+ 6$

12.  $8$   
 $+ 2$

13.  $6$   
 $+ 0$

14.  $4$   
 $+ 3$

15.  $3$   
 $+ 6$


16.  $0$   
 $+ 4$

17.  $5$   
 $+ 4$

18.  $9$   
 $+ 0$

19.  $3$   
 $+ 4$

20.  $5$   
 $+ 2$

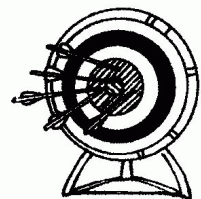



**Real World Connection**

**Tell a story. Write two addition sentences.**

21. \_\_\_\_\_ + \_\_\_\_\_ = \_\_\_\_\_

\_\_\_\_\_ + \_\_\_\_\_ = \_\_\_\_\_



\_\_\_\_\_ arrows