


Name \_\_\_\_\_

# ..... Zero in on the Order .....

 Write the sums.

1. 0  
+ 8

2. 8  
+ 0

3. 4  
+ 6

4. 6  
+ 4

5. 9  
+ 1

6. 1  
+ 9

7. 5  
+ 3

8. 3  
+ 5

9. 7  
+ 3

10. 0  
+ 5

11. 2  
+ 6

12. 8  
+ 2

13. 6  
+ 0

14. 4  
+ 3

15. 3  
+ 6


16. 0  
+ 4

17. 5  
+ 4

18. 9  
+ 0

19. 3  
+ 4


20. 5  
+ 2



## Real World Connection

Tell a story. Write two addition sentences.

21. \_\_\_\_\_ + \_\_\_\_\_ = \_\_\_\_\_  
\_\_\_\_\_ + \_\_\_\_\_ = \_\_\_\_\_



\_\_\_\_\_ arrows