


Name _____

..... **Zero in on the Order**

 Write the sums.

1. 0
+ 8

2. 8
+ 0

3. 4
+ 6

4. 6
+ 4

5. 9
+ 1

6. 1
+ 9

7. 5
+ 3

8. 3
+ 5

9. 7
+ 3

10. 0
+ 5

11. 2
+ 6

12. 8
+ 2

13. 6
+ 0

14. 4
+ 3

15. 3
+ 6


16. 0
+ 4

17. 5
+ 4

18. 9
+ 0

19. 3
+ 4

20. 5
+ 2

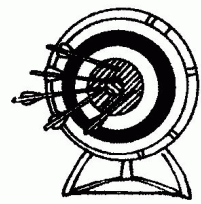



Real World Connection

Tell a story. Write two addition sentences.

21. _____ + _____ = _____

_____ + _____ = _____



_____ arrows